
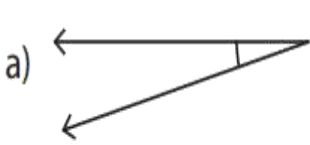


Name - _____

Start time - __: __

End time - __: __

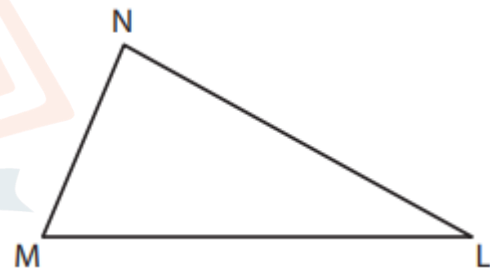
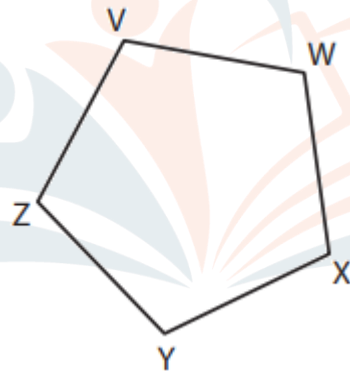
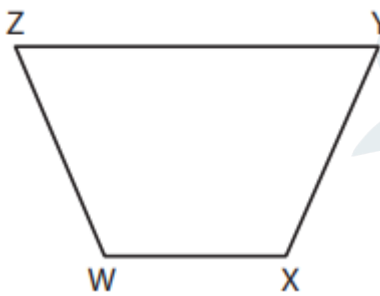
Identify each angle as acute, right, obtuse, straight, or reflex.




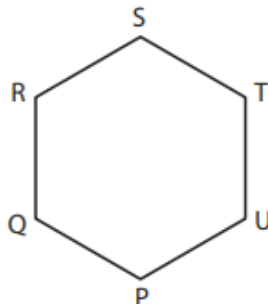
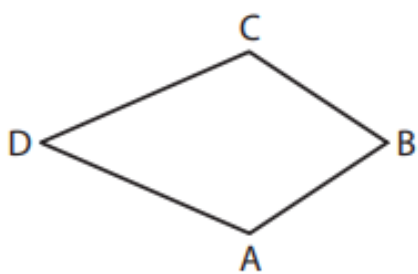
| | | |
|--|--|--|
| | | |
|--|--|--|

CHALLENGE

Identify the type of each indicated angle.



| | | |
|-------------------|-------------------|-------------------|
| Angle YXW = _____ | Angle ZYX = _____ | Angle MNL = _____ |
|-------------------|-------------------|-------------------|



| | | |
|-------------------|-------------------|-------------------|
| Angle ABC = _____ | Angle RST = _____ | Angle LKN = _____ |
|-------------------|-------------------|-------------------|