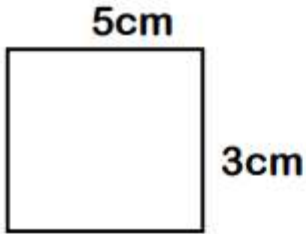


Name - _____

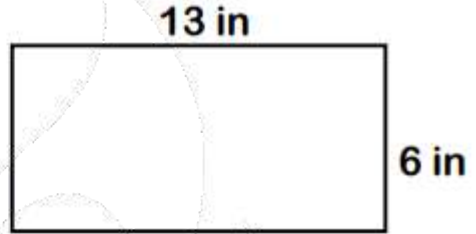
Start time - __ : __

End time - __ : __

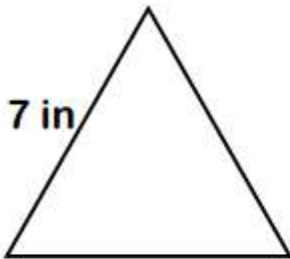
Write the perimeter of the given shapes :



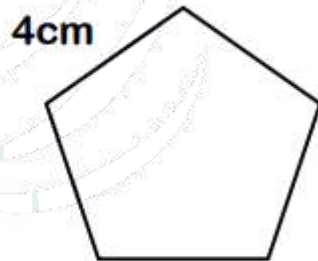
Perimeter = ____ cm



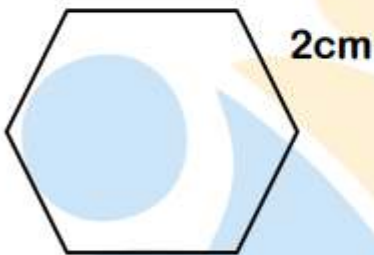
Perimeter = ____ in



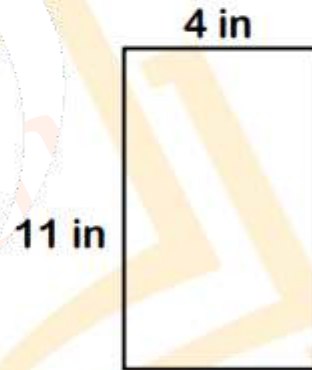
Perimeter = ____ in



Perimeter = ____ cm



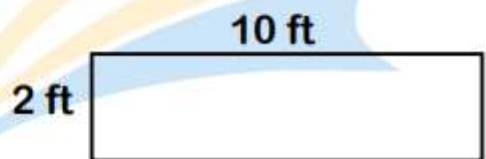
Perimeter = ____ cm



Perimeter = ____ in



Perimeter = ____ cm



Perimeter = ____ in