









Name - _____

Start time - __ : __

End time - __ : __

Write the perimeter of the given shapes :

<p style="text-align: center;">9 CM</p>  <p style="text-align: right;">6 CM</p> <p>PERIMETER= _____</p> <p>AREA = _____</p>	 <p style="text-align: right;">4 CM</p> <p>PERIMETER= _____</p> <p>AREA = _____</p>
<p style="text-align: center;">8 CM</p>  <p style="text-align: right;">5 CM</p> <p>PERIMETER= _____</p> <p>AREA = _____</p>	<p style="text-align: center;">7 CM</p>  <p style="text-align: right;">4 CM</p> <p>PERIMETER= _____</p> <p>AREA = _____</p>
<p style="text-align: center;">8 CM</p>  <p style="text-align: right;">2 CM</p> <p>PERIMETER= _____</p> <p>AREA = _____</p>	<p style="text-align: center;">7 CM</p>  <p style="text-align: right;">5 CM</p> <p>PERIMETER= _____</p> <p>AREA = _____</p>
<p style="text-align: center;">5 CM</p>  <p style="text-align: right;">2 CM</p> <p>PERIMETER= _____</p> <p>AREA = _____</p>	<p style="text-align: center;">6 CM</p>  <p style="text-align: right;">3 CM</p> <p>PERIMETER= _____</p> <p>AREA = _____</p>