

Name - _____

Start time - __: __

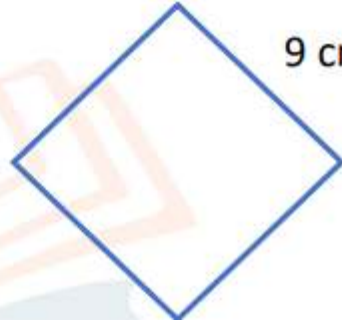
End time - __: __

Write the perimeter and area of the given shapes :

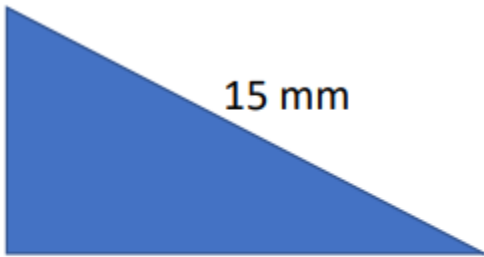
6 cm



9 cm



5 mm



11 mm

15 mm

5 cm

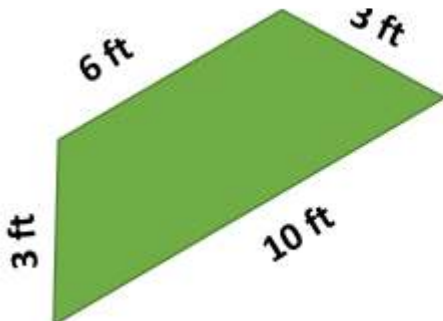


5 cm

5 cm

5 cm

6 ft



3 ft

10 ft

3 cm



3 cm

6 cm

4 yd.

2 yd.

2 yd.

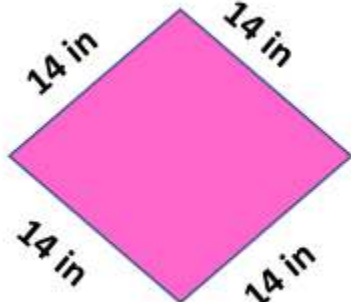


3 yd.

3 yd.

14 in

14 in



14 in

14 in

1

2

3

4

5

6

7

8

9