









Name - \_\_\_\_\_

Start time - \_\_ : \_\_

End time - \_\_ : \_\_

Write the perimeter of the given shapes :

 <p>4 cm</p> <p>PERIMETER= _____</p> <p>AREA = _____</p>	 <p>6 cm</p> <p>PERIMETER= _____</p> <p>AREA = _____</p>
 <p>5 cm</p> <p>PERIMETER= _____</p> <p>AREA = _____</p>	 <p>9 cm</p> <p>PERIMETER= _____</p> <p>AREA = _____</p>
 <p>2 cm</p> <p>PERIMETER= _____</p> <p>AREA = _____</p>	 <p>3 cm</p> <p>PERIMETER= _____</p> <p>AREA = _____</p>
 <p>7 cm</p> <p>PERIMETER= _____</p> <p>AREA = _____</p>	 <p>8 cm</p> <p>PERIMETER= _____</p> <p>AREA = _____</p>

1

2

3

4

5

6

7

8

9