

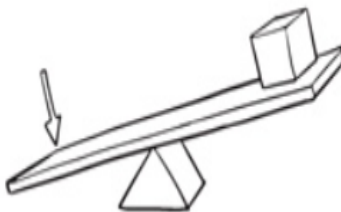


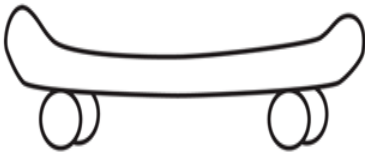
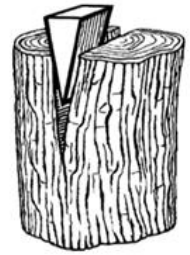
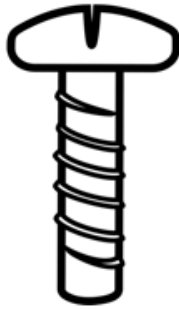

Name - _____

Start time - ___ : ___

End time - ___ : ___

Label the following simple machines below and color it.

Pulley, Inclined Plane, Wheel/Axle, Screw, Wedge, Lever



a b c d e f g h i j k l m n o p q r s t u v w x y z