

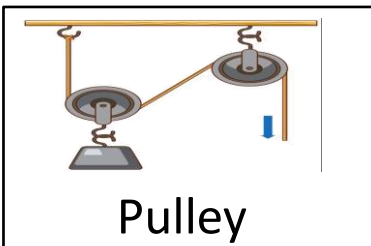

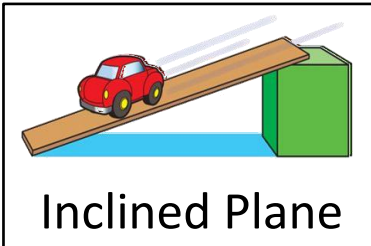
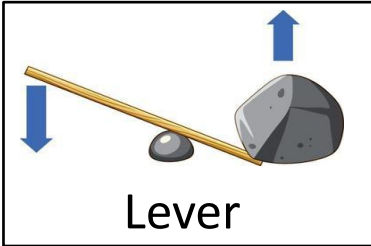


Name - \_\_\_\_\_

Start time - \_\_\_ : \_\_\_

End time - \_\_\_ : \_\_\_

Draw a line to connect each simple machine with the correct description.



Transfers force through a turning motion.

Sloping surface that reduces the effort needed to move an object.

Rotates on an axis.

A machine consisting of a rope that fits into a groove in a wheel.

An inclined plane wrapped around a cylinder.

Two inclined planes back-to-back.

a b c d e f g h i j k l m n o p q r s t u v w x y z