


Name - \_\_\_\_\_

Start time - \_\_ : \_\_


End time - \_\_ : \_\_

List two examples for each type of simple machine.



Screw

1. \_\_\_\_\_
2. \_\_\_\_\_



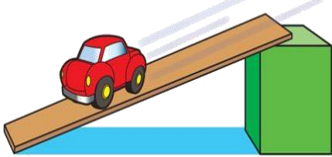
Lever

1. \_\_\_\_\_
2. \_\_\_\_\_



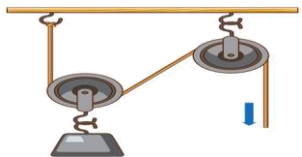
Wheel and Axle

1. \_\_\_\_\_
2. \_\_\_\_\_




Inclined Plane

1. \_\_\_\_\_
2. \_\_\_\_\_



Pulley

1. \_\_\_\_\_
2. \_\_\_\_\_



Wedge

1. \_\_\_\_\_
2. \_\_\_\_\_

a b c d e f g h i j k l m n o p q r s t u v w x y z