
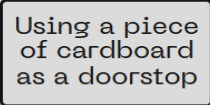
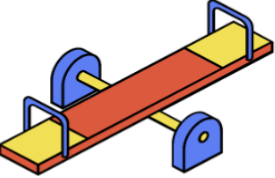



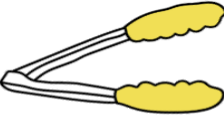
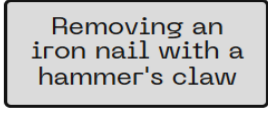

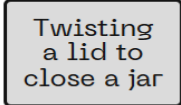
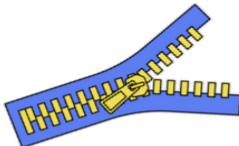
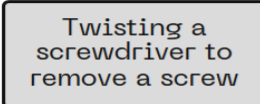




Name - \_\_\_\_\_

Start time - \_\_\_ : \_\_\_

End time - \_\_\_ : \_\_\_

Review the images and descriptions below and place them under the correct type of simple machine.

 Screw end of a light bulb  Using a piece of cardboard as a doorstep  Seesaw	 Climbing up a ladder  Knife	 construction crane  Kitchen tongs  Removing an iron nail with a hammer's claw	 Doorknob  Twisting a lid to close a jar  Zip	 Twisting a screwdriver to remove a screw  Yoyo  Slide
---	---	--	--	--

Pulley

Wedge

Screw

Wheel and axle

Inclined plane

Lever

a b c d e f g h i j k l m n o p q r s t u v w x y z