







Name - \_\_\_\_\_

Start time - \_\_\_ : \_\_\_

End time - \_\_\_ : \_\_\_

Identify each edible part of a plant and write its name in the space given.



a b c d e f g h i j k l m n o p q r s t u v w x y z