

Name - _____




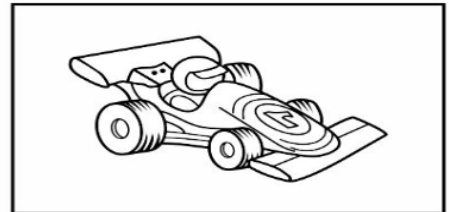
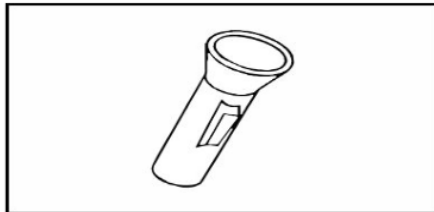
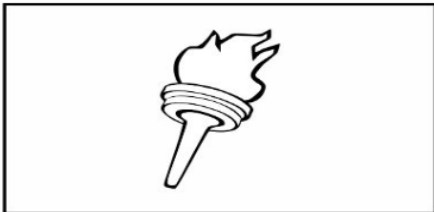
Start time - ___ : ___

End time - ___ : ___

Put names of object for each form of energy below.

Form of energy	Name of object
Sound	
Mechanical	
Heat and light	
Chemical	
Electrical	
Nuclear	

For each picture write what the form of energy is.



a b c d e f g h i j k l m n o p q r s t u v w x y z