

Name - _____

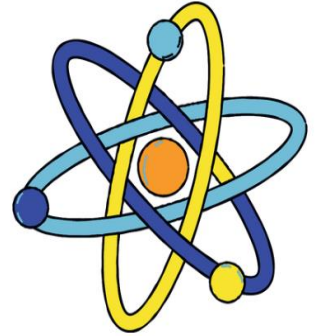
Start time - ___ : ___

End time - ___ : ___

Identify the form of energy each image below represents.





















a b c d e f g h i j k l m n o p q r s t u v w x y z