






Name - _____

Start time - __ : __

End time - __ : __

Write down the answers with the help of pictograph:

| | |
|-----------|--|
| Robin |  |
| Blackbird |  |
| Wren |  |
| Magpie |  |

2 bird = 

- Which bird was spotted the most ?
- Which bird is spotted the least ?
- How many blackbird are there ?
- How many robin are there ?
- How many magpie are there ?
- Is the bird robin more or the blackbird ?
- Is the bird magpie more or the wren ?
- Write the total number of birds in the pictogram ?
.....

1

2

3

4

5

6

7

8

9