







Name - _____

Start time - __: __

End time - __: __

Write down the answers with the help of pictograph:

Monday	
Tuesday	
Wednesday	
Thursday	
Friday	

 = 10
aeroplanes

- How many aeroplanes landed on Thursday and Friday in total ?
.....
- How many more aeroplanes landed on Tuesday than Wednesday ?
?
- How many fewer aeroplanes landed on Monday than Friday ?
.....
- How many aeroplanes in total landed at the airport from Monday to Wednesday ?
- Write the total number of planes are there in the pictographs ?
.....
- How many planes landed on Wednesday ?
- One aeroplanes picture represents how many planes in number ?
.....

1

2

3

4

5

6

7

8

9