







Name - _____

Start time - __ : __

End time - __ : __

Write down the answers with the help of pictograph:

Monday	
Tuesday	
Wednesday	
Thursday	
Friday	

 = 2 cars

- How many cars repaired on Wednesday ?
- How many more cars were repaired on Friday than Tuesday ?
.....
- How many cars were repaired on Monday and Tuesday ?
.....
- How many fewer cars were repaired on Thursday than Friday ?
.....
- How many cars were repaired on Thursday and Friday ?
.....
- How many cars were repaired over the five days ?
.....
- One car picture represent how many cars in number ?
.....