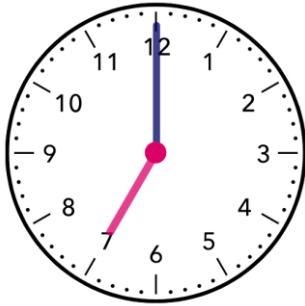


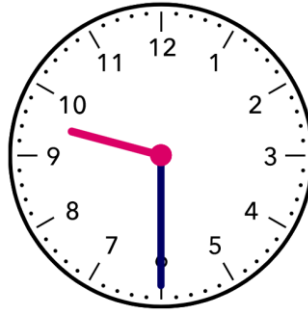
Name - _____

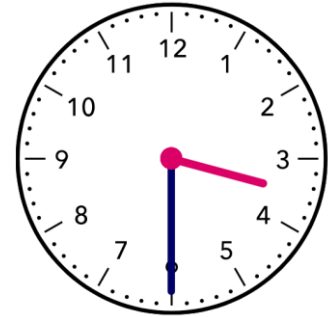
Start time - __: __

End time - __: __

What time is shown:







Which takes more time ?

Watching TV



Boiling a kettle



Which takes less time ?

Hopping 10 times



Taking a bath



Which is longer ?

3 days

2 days

4 hours

5 minutes

Which is shorter ?

7 seconds

8 seconds

6 days

7 seconds

CHALLENGE

Write the time in words by looking at the analogue clock :



1 2 3 4 5 6 7 8 9