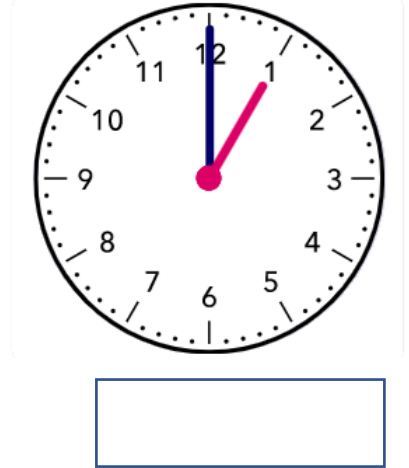
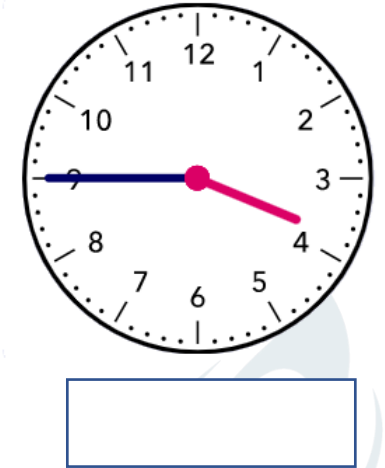
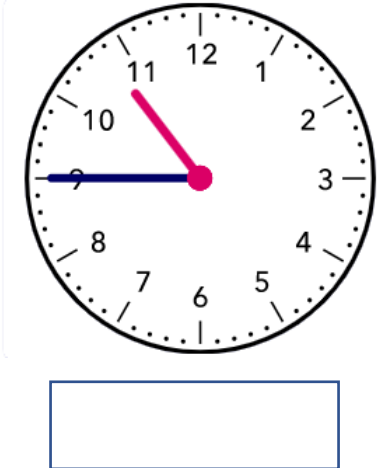


Name - \_\_\_\_\_

Start time - \_\_: \_\_

End time - \_\_: \_\_

What time is shown:



Solve :

1. Sam spends 7 hours each day at school. How many hours each day does Sam spend outside school ? .....
2. Alana's flight from the Los Angeles to Tokyo took half a day. How many hours is that ?.....
3. Gabriel caught a train from London to Frankfurt. The journey took a quarter of a day. How many hours is that ? .....
4. Jake plays for an hour. For 5 minutes of the hour he plays with a ball. For the rest of the hour he rides his bike. How many minutes of the hour does Jake spend riding his bike? .....

**CHALLENGE**

Write the time in words by looking at the analogue clock :




1      2      3      4      5      6      7      8      9