


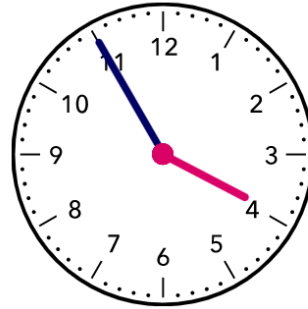

Name - \_\_\_\_\_

Start time - \_\_: \_\_

End time - \_\_: \_\_

Complete the time for each clock {an example is given}:

Clue – use ‘minutes to’ for times after half past, e.g 25 minutes to 4







Last month	This month	Next month
		December
		August
		February
		June
		April
		September
		January
		March

Which day comes next ?

- Monday, Tuesday, Wednesday .....
- Tuesday, Wednesday, Thursday .....