


Name - _____

Start time - ___ : ___

End time - ___ : ___


Circle the correct answer.

$5 \times 5 =$ 

40

25


50

$3 \times 7 =$ 

12

21


24

$4 \times 3 =$ 

12

18


30

$4 \times 7 =$ 

28

16


54

$2 \times 7 =$ 

2

14


12

$3 \times 10 =$ 

30

24


18

$5 \times 7 =$ 

48

14

35

$4 \times 2 =$ 

24

6

8

1

2

3

4

5

6

7

8

9