



Name - \_\_\_\_\_


Start time - \_\_\_ : \_\_\_


End time - \_\_\_ : \_\_\_

Complete the following multiplication.


  
 $3 \times 7 =$


  
 $2 \times 4 =$


  
 $5 \times 3 =$


  
 $4 \times 4 =$


  
 $2 \times 9 =$


  
 $5 \times 10 =$


  
 $5 \times 2 =$


  
 $2 \times 8 =$

  
 $4 \times 1 =$


  
 $2 \times 4 =$

  
 $3 \times 9 =$

  
 $3 \times 3 =$

  
 $5 \times 2 =$

  
 $3 \times 4 =$

  
 $2 \times 10 =$

1

2

3

4

5

6

7

8

9