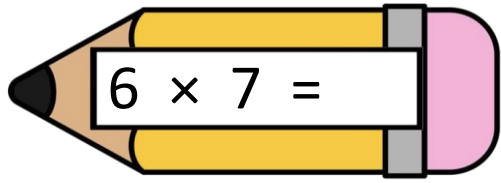


Name - _____

Start time - ___ : ___

End time - ___ : ___

Circle the correct answer.

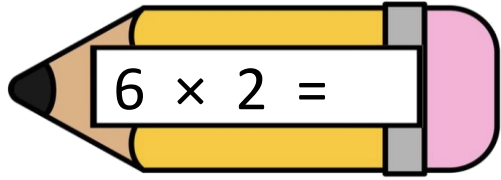


$6 \times 7 =$

54

42

60

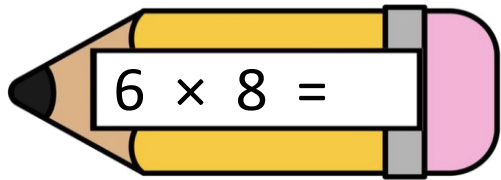


$6 \times 2 =$

12

18

24

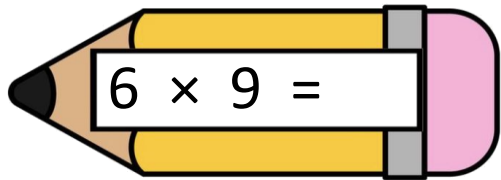


$6 \times 8 =$

72

48

30

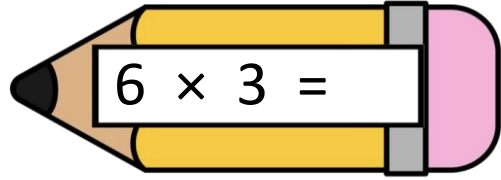


$6 \times 9 =$

18

6

54

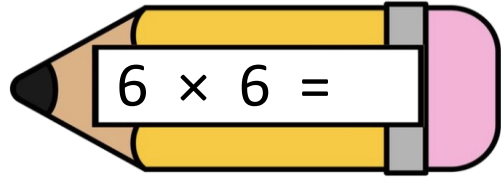


$6 \times 3 =$

42

18

12

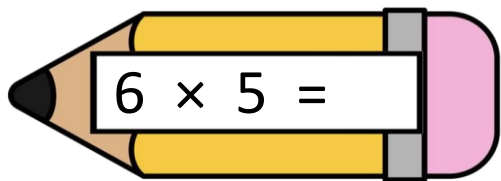


$6 \times 6 =$

36

24

18

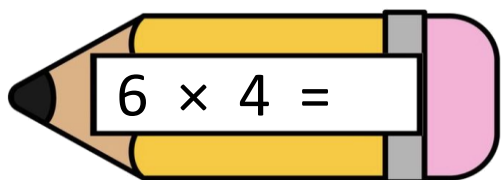


$6 \times 5 =$

48

14

30



$6 \times 4 =$

24

6

12

1

2

3

4

5

6

7

8

9