



Name - \_\_\_\_\_


Start time - \_\_\_ : \_\_\_

End time - \_\_\_ : \_\_\_


Complete the following multiplication.


 $6 \times 3 =$


 $6 \times 5 =$


 $6 \times 2 =$


 $6 \times 11 =$


 $6 \times 4 =$


 $6 \times 10 =$


 $6 \times 8 =$

 $6 \times 1 =$

 $6 \times 9 =$

 $6 \times 12 =$

 $6 \times 6 =$

 $6 \times 7 =$

1

2

3

4

5

6

7

8

9