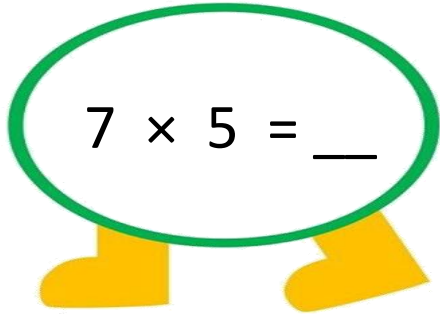


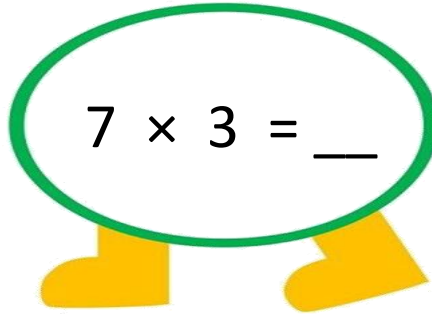
Name - \_\_\_\_\_

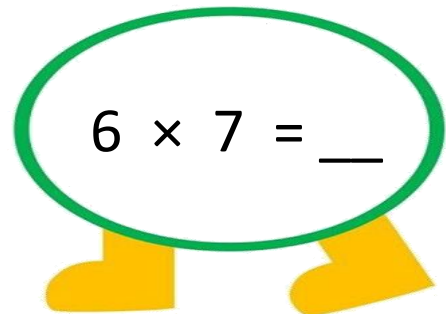
Start time - \_\_\_ : \_\_\_

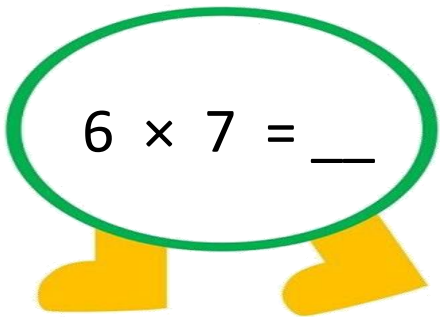
End time - \_\_\_ : \_\_\_

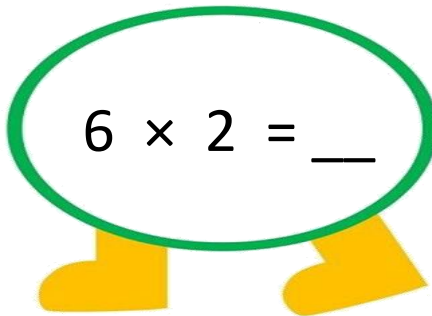
**Complete the following multiplication.**

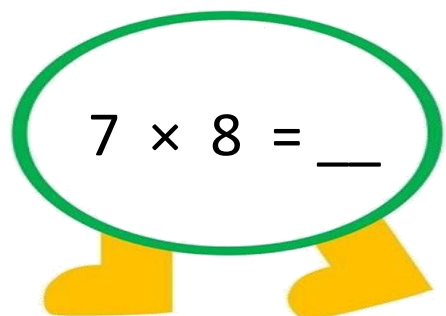
 $7 \times 5 = \underline{\quad}$

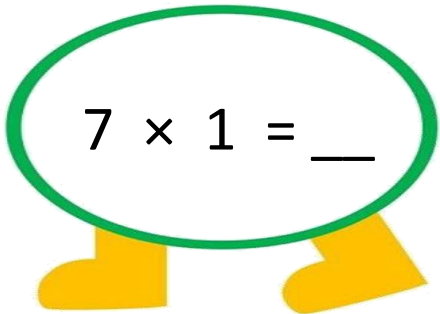
 $7 \times 3 = \underline{\quad}$

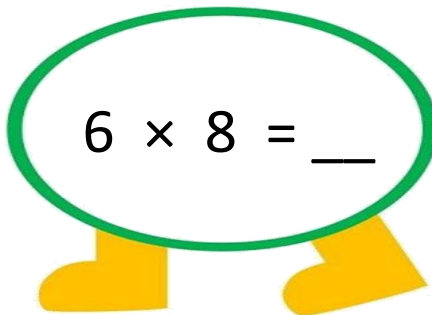
 $6 \times 7 = \underline{\quad}$

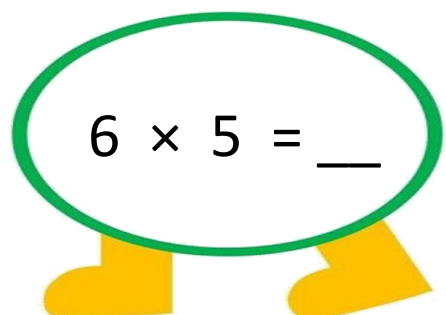
 $6 \times 7 = \underline{\quad}$

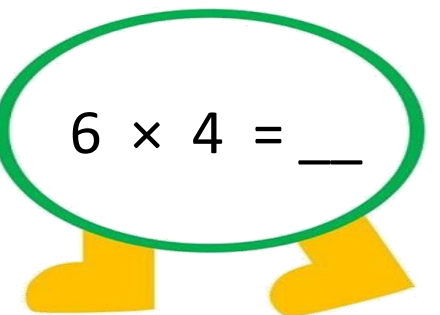
 $6 \times 2 = \underline{\quad}$

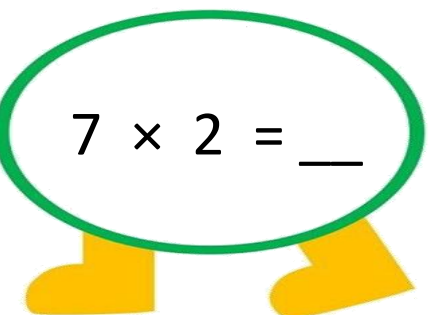
 $7 \times 8 = \underline{\quad}$

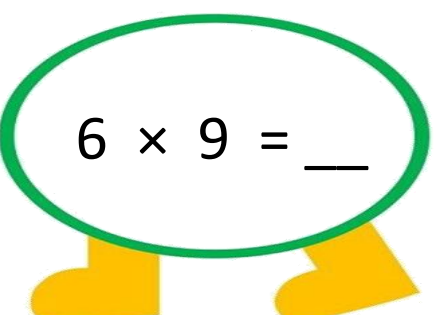
 $7 \times 1 = \underline{\quad}$

 $6 \times 8 = \underline{\quad}$

 $6 \times 5 = \underline{\quad}$

 $6 \times 4 = \underline{\quad}$

 $7 \times 2 = \underline{\quad}$

 $6 \times 9 = \underline{\quad}$

1

2

3

4

5

6

7

8

9