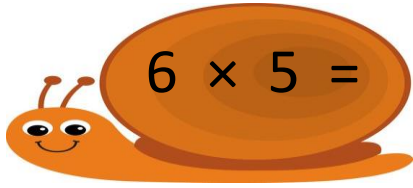


Name - \_\_\_\_\_

Start time - \_\_\_ : \_\_\_

End time - \_\_\_ : \_\_\_

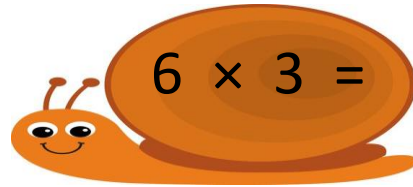
Complete the following multiplication.



40

30

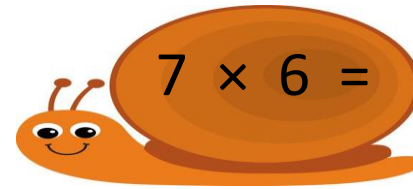
60



18

12

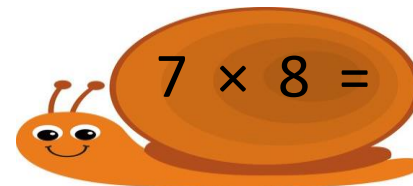
6



70

42

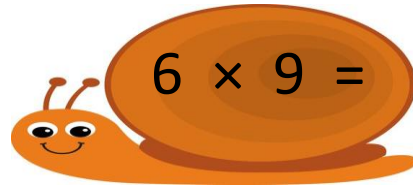
54



56

28

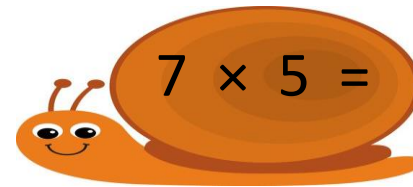
63



54

30

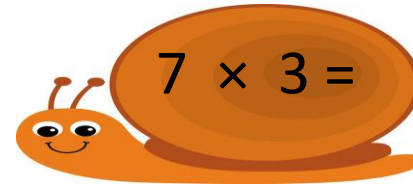
42



35

27

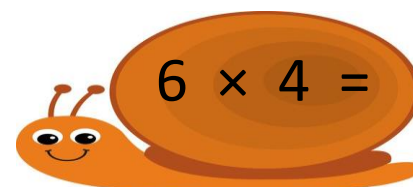
45



54

42

21



48

30

24

1

2

3

4

5

6

7

8

9