









Name ÷ _____

Start time ÷ ___ : ___

End time ÷ ___ : ___

Draw lines to match the picture of the coins to their correct value and names:

Coin / currency	Name	Value
	5 ¢	Nickel
	25 ¢	Quarter
	50 ¢	Penny
	1 ¢	Dime
	100 ¢	10 dollar
	10 ¢	2 dollar
	5\$	Half dollar
	10\$	One dollar

1 2 3 4 5 6 7 8 9