















Name ÷ \_\_\_\_\_

Start time ÷ \_\_\_ : \_\_\_

End time ÷ \_\_\_ : \_\_\_

Write the names of following coins and currency:

Coin / currency	Name	Value
 		
 		
 		
 		
 		
 		
		
		

**CHALLENGE**

3 apples = 7 \$

1 pear = 15 \$

Total = .....

3 apples = 6 \$

1 pear = 5 \$

Total = .....

3 apples = 19 \$

1 pear = 7 \$

Total = .....

3 apples = 8 \$

1 pear = 13 \$

Total = .....