




Name - _____

Start time - __ : __

End time - __ : __

Calculate the price of the fruits with the help of the box:

				
\$ 21	\$ 14	\$ 25	\$ 24	\$ 22

- 2 bananas + 3 strawberries =
- 2 cherries + 3 orange =
- 2 bananas + 3 plum =
- 2 cherries + 3 strawberries =
- 2 bananas + 3 cherries =
- 2 plum + 3 oranges =
- 2 cherries + 3 plum =
- 2 bananas + 3 oranges =

CHALLENGE

- 44\$ + 22\$ =
- 13\$ + 45 \$ =
- 19\$ + 5\$ + 4\$ =
- 29\$ + 14\$ =