

Name - _____

Start time - __ : __

End time - __ : __

Observe the pattern and write the numbers in the sequence:

2, 4, 6, 8, 10, _____, _____, _____

4, 8, 12, 16, _____, _____, _____







5, 10, 15, 20, 25, _____, _____, _____

6, 12, 18, 24, 30, _____, _____, _____

3, 6, 9, 12, 15, _____, _____, _____

1, 4, 7, 10, 13, _____, _____, _____

Match the following:

(a)		(i)	
(b)		(ii)	
(c)		(iii)	

CHALLENGE

James saves \$14 in the month of January. Every month he saves \$5 more than the previous month. How much will he save in the month of May?

1 2 3 4 5 6 7 8 9