

Name - \_\_\_\_\_

Start time - \_\_ : \_\_

End time - \_\_ : \_\_

Observe the pattern and write the numbers in the sequence:

2, 4, 6, 8, \_\_\_\_\_, \_\_\_\_\_, \_\_\_\_\_

17, 19, 21, 23, 25, \_\_\_\_\_, \_\_\_\_\_, \_\_\_\_\_

48, 44, 40, 36, 32, \_\_\_\_\_, \_\_\_\_\_, \_\_\_\_\_







10, 15, 20, 25, 30, \_\_\_\_\_, \_\_\_\_\_, \_\_\_\_\_

27, 25, 23, 21, 19, \_\_\_\_\_, \_\_\_\_\_, \_\_\_\_\_

1, 3, 5, 7, 9, \_\_\_\_\_, \_\_\_\_\_, \_\_\_\_\_

11, 14, 17, 20, 23, \_\_\_\_\_, \_\_\_\_\_, \_\_\_\_\_

Match the following:

(a) 	(i) 
(b) 	(ii) 
(c) 	(iii) 

## CHALLENGE

A coconut tree was 19 ft. tall in the year 2019. Every year it grew by 3 ft. How tall will it be in the year 2022?

1      2      3      4      5      6      7      8      9