

Name - _____

Start time - __: __

End time - __: __

Observe the pattern and write the numbers in the sequence:

70, 69, 68, 67, 66, _____, _____, _____

20, 17, 14, 11, _____, _____, _____

10, 20, 30, 40, 50, _____, _____, _____



















10, 12, 14, 16, 18, 20, _____, _____, _____

10, 13, 16, 19, 22, _____, _____, _____

15, 18, 21, 24, 27, _____, _____, _____

40, 38, 36, 34, 32, _____, _____, _____

Match the following:

(a)				(i)			
(b)				(ii)			
(c)				(iii)			

CHALLENGE

A mango tree was 15 ft. tall in the year 2019. Every year it grew by 3 ft. How tall will it be in the year 2022.

1 2 3 4 5 6 7 8 9