

Name - \_\_\_\_\_

Start time - \_\_\_ : \_\_\_

End time - \_\_\_ : \_\_\_


Choose the correct answer for the following pictures.



Natural / Man made



Natural / Man made




Natural / Man made



Natural / Man made




Natural / Man made



Natural / Man made



Natural / Man made



Natural / Man made

a b c d e f g h i j k l m n o p q r s t u v w x y z