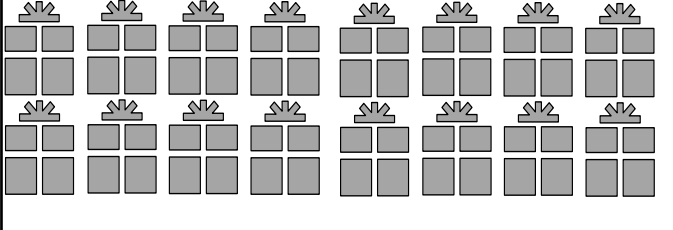





Name - _____

Start time - __: __

End time - __: __

Count the pictures. Classify the total as odd or even :

	
<p>No of gifts : _____</p>	<p>No of paper clip : _____</p>
<p>Odd numbers / Even numbers</p>	<p>Odd numbers / Even numbers</p>

	
<p>No of houses : _____</p>	<p>No of watches : _____</p>
<p>Odd numbers / Even numbers</p>	<p>Odd numbers / Even numbers</p>

Answer the following:

1. Is the number 3 odd or even?
2. Is the number 6 odd or even?
3. Is the number 9 odd or even?
4. Is the number 12 odd or even?
5. Is the number 15 odd or even?
6. Is the number 18 odd or even?
7. Is the number 21 odd or even?
8. Is the number 24 odd or even?
9. Is the number 27 odd or even?
10. Is the number 30 odd or even?

1 2 3 4 5 6 7 8 9