





Name - \_\_\_\_\_

Start time - \_\_: \_\_

End time - \_\_: \_\_

Count the pictures. Classify the total as odd or even :

	
<p>No of flower pot : _____</p>	<p>No of dresses : _____</p>
<p>Odd numbers / Even numbers</p>	<p>Odd numbers / Even numbers</p>
	
<p>No of pandas : _____</p>	<p>No of tags : _____</p>
<p>Odd numbers / Even numbers</p>	<p>Odd numbers / Even numbers</p>

Answer the following:

1. Is the number 2 odd or even?
2. Is the number 5 odd or even?
3. Is the number 8 odd or even?
4. Is the number 11 odd or even?
5. Is the number 14 odd or even?
6. Is the number 17 odd or even?
7. Is the number 20 odd or even?
8. Is the number 23 odd or even?
9. Is the number 26 odd or even?

1

2

3

4

5

6

7

8

9