

Name - _____

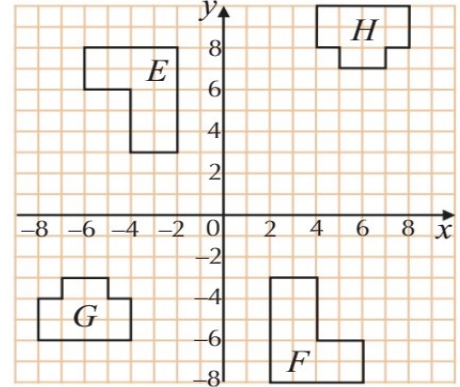
Start time - __ : __

End time - __ : __

Solve the following

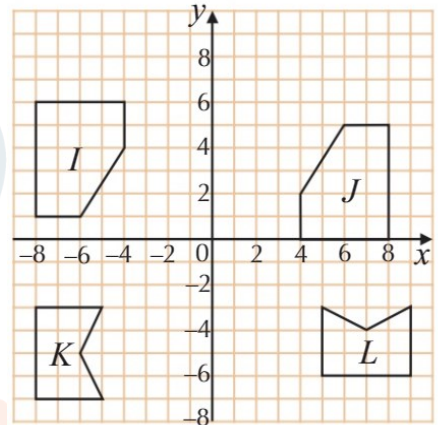
1. (i) Describe fully the transformation that maps shape E to shape F.

(ii) Describe fully the transformation that maps shape G to shape H.



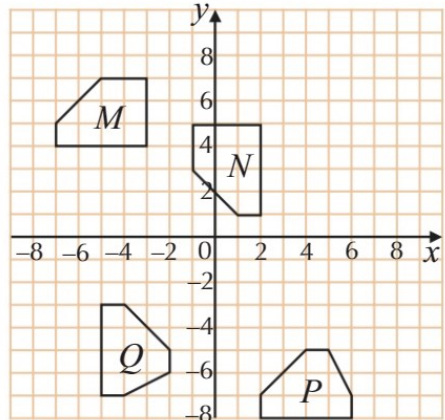
2. (i) Describe fully the transformation that maps shape I to shape J.

(ii) Describe fully the transformation that maps shape K to shape L.



3. (i) Describe fully the transformation that maps shape M to shape N.

(ii) Describe fully the transformation that maps shape P to shape Q.



4. a) Describe fully the transformation that maps shape R to shape S.

b) Describe fully the transformation that maps shape R to shape T.

c) Describe fully the transformation that maps shape S to shape T.

