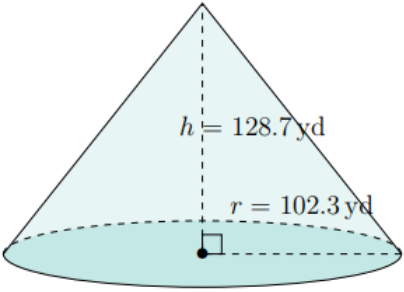
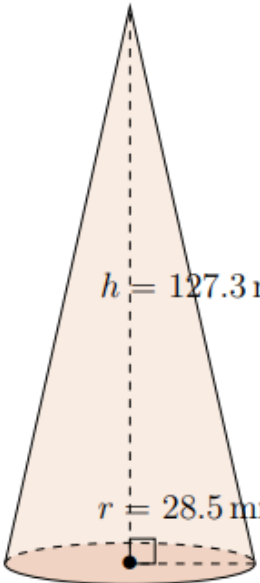
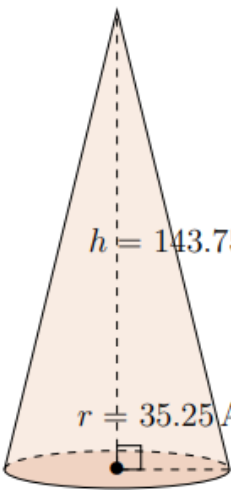
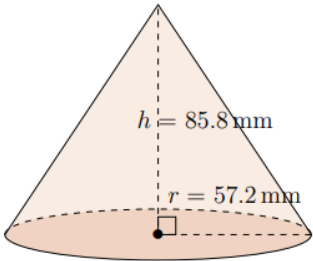
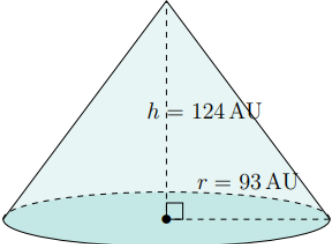
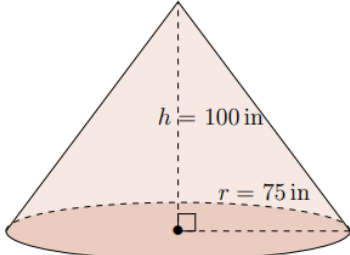
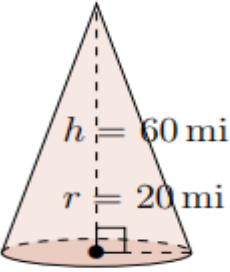
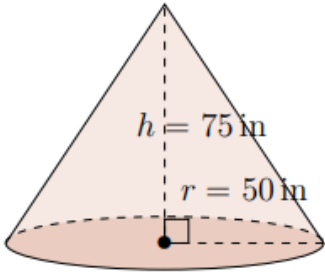


Name - _____

Start time - __: __

End time - __: __

Solve the following :

 <p>$h = 128.7 \text{ yd}$ $r = 102.3 \text{ yd}$</p>	 <p>$h = 127.3 \text{ mm}$ $r = 28.5 \text{ mm}$</p>	 <p>$h = 143.75 \text{ AU}$ $r = 35.25 \text{ AU}$</p>
 <p>$h = 85.8 \text{ mm}$ $r = 57.2 \text{ mm}$</p>	 <p>$h = 124 \text{ AU}$ $r = 93 \text{ AU}$</p>	 <p>$h = 100 \text{ in}$ $r = 75 \text{ in}$</p>
 <p>$h = 60 \text{ mi}$ $r = 20 \text{ mi}$</p>	 <p>$h = 75 \text{ in}$ $r = 50 \text{ in}$</p>	

1

2

3

4

5

6

7

8

9