

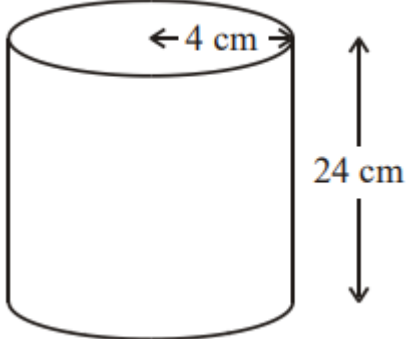
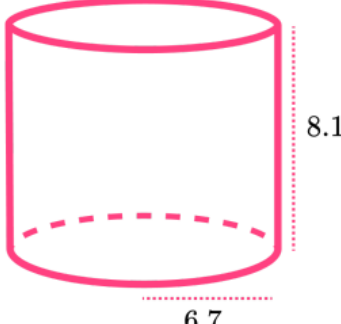
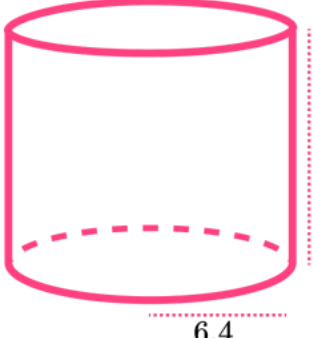
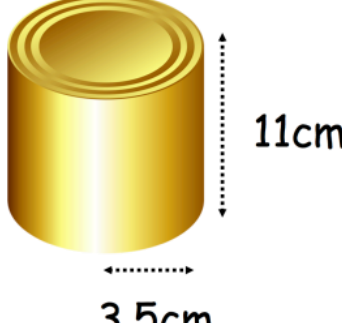

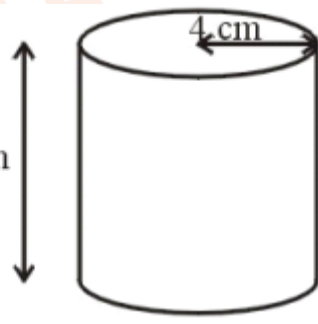
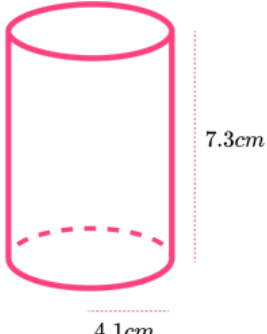
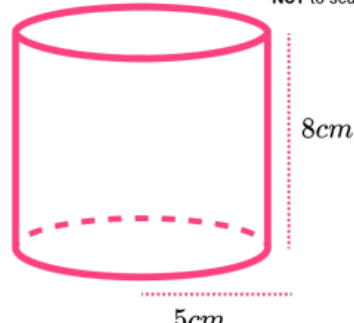
Name - _____

Start time - __: __

End time - __: __

Work out the volume of the cylinder.

Give your answer correct to 3 significant figures:

 <p>← 4 cm → 24 cm</p>	 <p>8.1 6.7</p>
 <p>8.3 6.4</p>	 <p>11cm 3.5cm</p>
 <p>1.2m 0.4m</p>	 <p>10 cm 4 cm</p>
 <p>7.3cm 4.1cm</p>	 <p>NOT to scale 8cm 5cm</p>

1

2

3

4

5

6

7

8

9