

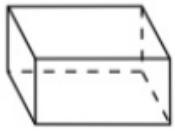
Name - _____

Start time - __: __

End time - __: __

Solve the following questions :

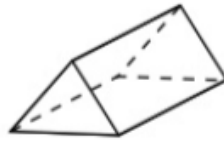
1. Use these 3D Shapes to answer questions:



A



B



C

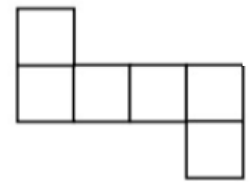


D



E

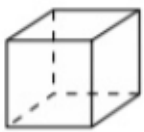
- A shape with 3 faces.
- A shape with 6 faces and 12 edges.
- A shape with 4 faces and 6 edges.
- A shape with 5 faces and 9 edges.
- A shape with 5 faces and 8 edges.



2. Jack is making a gift box. He uses this net. Which 3D shape does Jack make? Circle the correct answer.

- A) pyramid b) cube c) sphere d) cone e) cylinder

3. Ravi picks a 3D shape at random. It has 7 faces. Which of the following could be Ravi's shape? Circle the correct answer.



A



B



C



D



E

4. Rebecca made a 3D shape from this net. What shape did she make? Circle the correct answer.

- A) cube B) triangle-based pyramid
C) quadrilateral D) hexagonal prism
E) triangular prism

