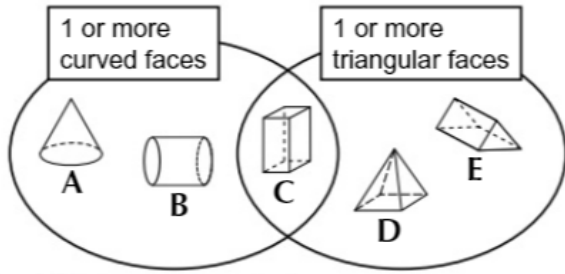


Name - _____

Start time - __: __

End time - __: __

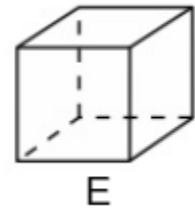
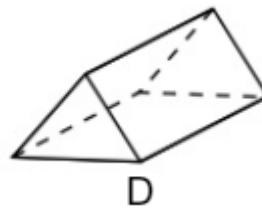
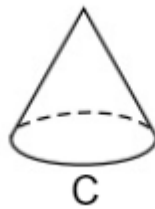
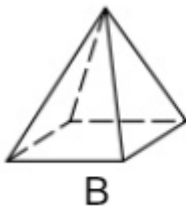
Solve the following questions :



1. Which shape should not be in the Venn diagram? Circle the correct answer.


A B C D E

2. Use these 3D Shapes to answer questions :

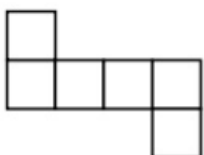


- How many rectangular faces does shape A have? _____
- Which shape has six identical faces? _____
- Which shape has five faces and nine edges? _____
- Which shape has fewer edges than faces? _____
- Which shape has five faces, eight edges and five vertices?

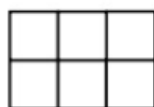
3. Ruth built this shape using 1 cm² cubes.
What is the volume of this shape?




4. Which of these nets will fold up to form a cube ? Circle the correct answer.



A



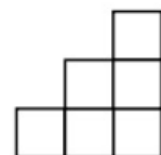
B



C



D



E

1

2

3

4

5

6

7

8

9